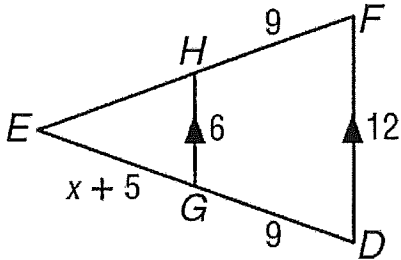


Name: \_\_\_\_\_

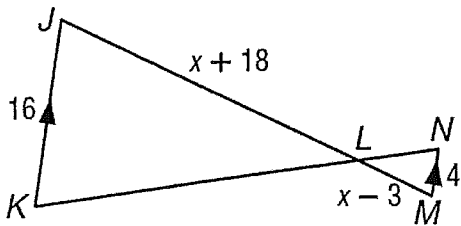
Practice Examples

Identify the similar triangles, how you know they are similar, find the variable(s) and the measures of the indicated sides.

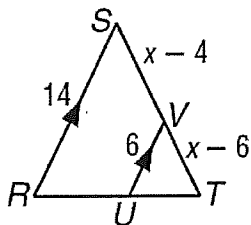
1.  $\overline{EH}$  and  $\overline{EF}$



2.  $\overline{JL}$  and  $\overline{LM}$

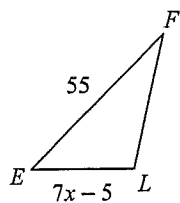
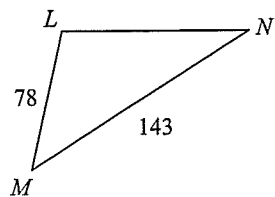


3.  $\overline{VT}$  and  $\overline{ST}$

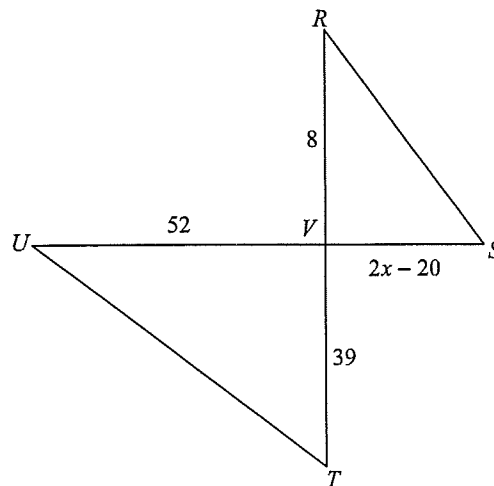


Solve for  $x$ . The triangles in each pair are similar.

12)



13)



14)

